

REVISED EDITION



Updated Maps


Class **3**

FUSION[®]

For Active and Holistic Learning

• English • Mathematics • Science • Social Studies

WORKBOOK



Kirti D Souza
Malathi Thomas



MACMILLAN

© Macmillan Publishers India Private Ltd, 2016, 2020

All rights reserved. No part of this publication may be reproduced or transmitted, in any form or by any means, without permission. Any person who does any unauthorised act in relation to this publication may be liable to criminal prosecution and civil claims for damages.

Revised edition 2020

MACMILLAN PUBLISHERS INDIA PRIVATE LTD

Delhi Bengaluru Chennai Kolkata Mumbai
Ahmedabad Bhopal Chandigarh Coimbatore Cuttack
Guwahati Hubli Hyderabad Jaipur Lucknow Madurai
Nagpur Patna Pune Thiruvananthapuram Visakhapatnam

SKEY-001740

Please refer to the updated map of India and the question given below in place of the map and question given on page 65 of the coursebook.

I. Look at the map—

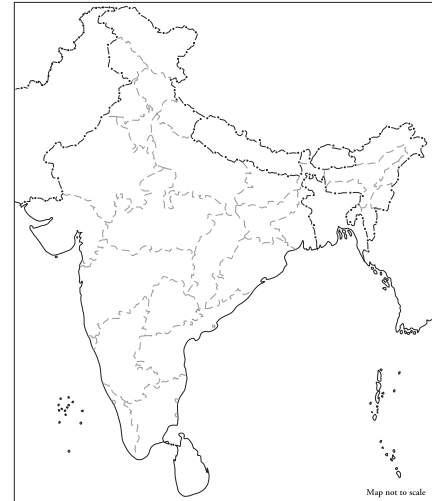
1. say whether it is a physical map or a political map

.....

2. why do you say so?

.....

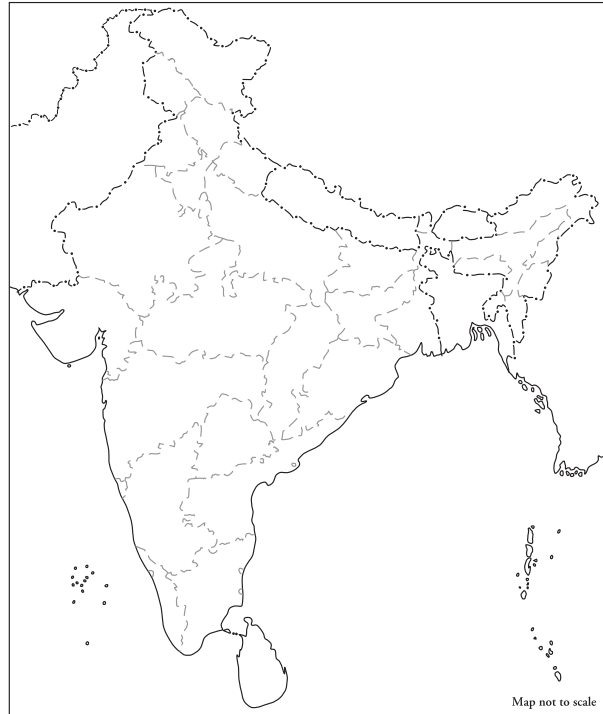
.....



Please refer to the updated map of India and the question given below in place of the map and question given on page 68 of the coursebook.

III. On the political map of India

1. colour and name the state you live in and its capital.
2. mark any two neighbouring states.



Please refer to the updated map of India given below in place of the map given on page 79 of the coursebook.



Please refer to the updated map of India given below in place of the map given on page 80 of the coursebook.

